


Sixteen points, six lines

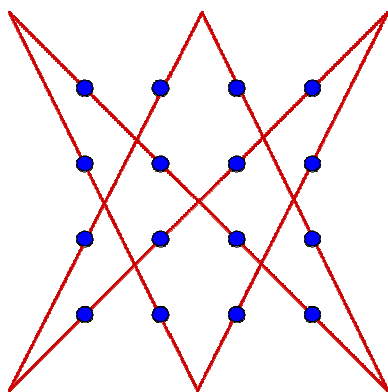
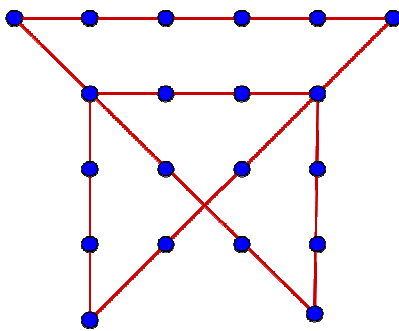
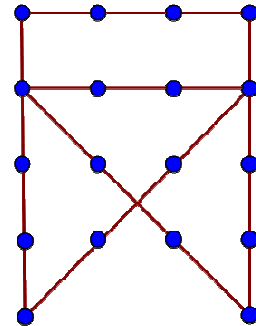
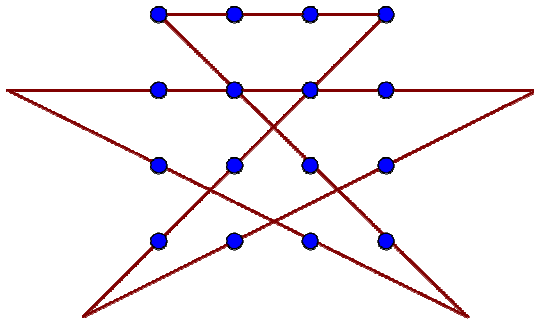
You are requested to draw six thin continuous straight lines passing through sixteen points in a square lattice as shown below.

- (1) You must not lift up your pen when drawing.
- (2) The starting point must also be the ending point.
- (3) You must give at least two possible solutions. Note that rotation or reflection of your solution is considered to be the same solution.



Answers:

I have got 4 solutions. There may be others.



Yue Kwok Choy
12/2/2016